

**Monday**

	Wins	Draws	Losses
Sunderland City	1	5	3
Manchester Rovers	2	1	6
Liverpool United	3	0	6
London Town	0	9	0

Win = 3 points Draw = 1 point Loss = 0 points

Which team has the least number of points?

How many points do they have?

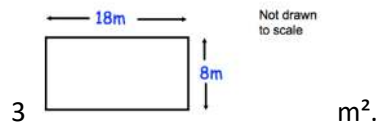
**Tuesday**

a. Work out  $5.18 \div 7$

b. Work out  $0.8 \times 1.2$

**Wednesday**

Mrs Jenkins is a farmer. Her field is 18m long and 8m wide. Each chicken requires at least

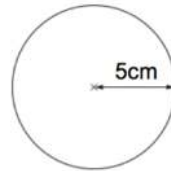


**Thursday**

Solve  $2(4x - 1) = 18$

**Friday**

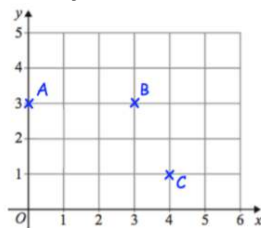
Work out the area of the circle. State the units for your answer. Give your answer to 2 decimal place.



**Saturday**

Write 0.4 as a fraction

**Sunday**



ABCD is a parallelogram. Complete the parallelogram and write down the coordinates of D